

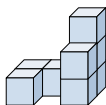
**Solve each problem.****Answers**

- 1) If you were looking at the 3d shape from the back what would you see?

A.

B.

C.



1. _____

2. _____

3. _____

4. _____

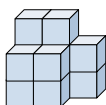
5. _____

- 2) If you were looking at the 3d shape from the back what would you see?

A.

B.

C.

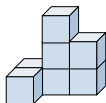


- 3) If you were looking at the 3d shape from above what would you see?

A.

B.

C.

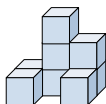


- 4) If you were looking at the 3d shape from the left side what would you see?

A.

B.

C.

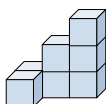


- 5) If you were looking at the 3d shape from the left side what would you see?

A.

B.

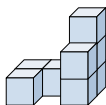
C.





Solve each problem.

- 1) If you were looking at the 3d shape from the back what would you see?



A.



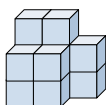
B.



C.



- 2) If you were looking at the 3d shape from the back what would you see?



A.



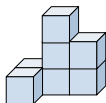
B.



C.



- 3) If you were looking at the 3d shape from above what would you see?



A.



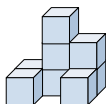
B.



C.



- 4) If you were looking at the 3d shape from the left side what would you see?



A.



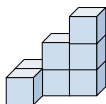
B.



C.



- 5) If you were looking at the 3d shape from the left side what would you see?



A.



B.



C.

**Answers**1. **B**2. **A**3. **B**4. **C**5. **A**